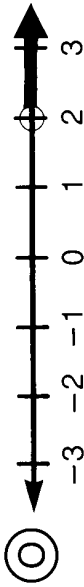




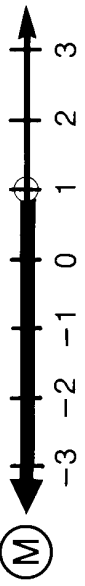


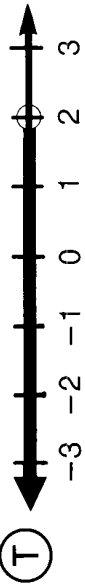


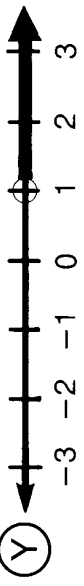

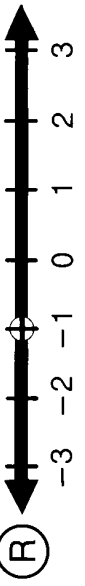
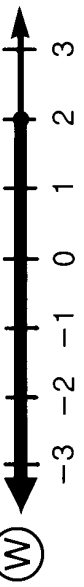





What Happened When the Crossword Puzzle Champion Died?

Find the graph of the solution set of each inequality below in the corresponding column of graphs. Notice the letter next to it. Write this letter in each box containing the number of that exercise. Keep working and you will find out about this grave event.

① $x < 2$		⑩ $x < 1$	
② $x \leq 2$		⑪ $1 < x$	
③ $x > 2$		⑫ $-3 \leq x$	
④ $x \geq 2$		⑬ $x > -3$	
⑤ $x \neq 1$		⑭ $x \neq -1$	
⑥ $x < -1$		⑮ $0 \geq x$	
⑦ $x > -1$		⑯ $0 \leq x$	
⑧ $x \leq -1$		⑰ $0 > x$	
⑨ $x \geq -1$		⑱ $0 < x$	

1	8	6	11	16	5	14	15	6	17	8	15	10	18	15	7	17	3	2	13	4	13	17	6	15	9	8	1	4	12	14	3	18	18
---	---	---	----	----	---	----	----	---	----	---	----	----	----	----	---	----	---	---	----	---	----	----	---	----	---	---	---	---	----	----	---	----	----